






Question Bank

Grade 1

Mathematics

Chapter 3 – Numbers from 1 to 9 and 0

A. Count and write the numbers and number names.

	4	FOUR
	3	THREE
	5	FIVE
	1	ONE
	7	SEVEN

B. Fill in the missing numbers on the caterpillar.



C. Connect the dots from 1 to 9 to find out what the picture is. Then draw 10 flies and colour the picture.



.....
THE END